

MATH 181 - Final Exam
December 15, 2016

Name: _____

1. Compute the following limits:

a. $\lim_{x \rightarrow -\infty} \frac{6x^5 - 4x^3 + 3x^2 - x + 1}{(1 - x^5)}$

b. $\lim_{x \rightarrow 2} \frac{x^2 + x - 6}{6 - 5x + x^2}$

c. $\lim_{x \rightarrow 0} \frac{1 - \cos(4x)}{x^2}$

d. $\lim_{x \rightarrow 0} \frac{\sqrt{1 + 2x} - \sqrt{1 - 4x}}{x}$

e. $\lim_{x \rightarrow \infty} x^{\frac{1}{x}}$

2. Find the derivatives of the following functions:

a. $f(x) = 1 + x^{-\frac{2}{3}} - \frac{1}{x} + e^{\pi x} + \cos(3x) + \pi^2$

b. $g(x) = \frac{\text{Ln}(2x + 3)}{\sin(5x)}$

c. $h(t) = \tan^{-1}(2t)\sqrt{2t - 1}$

d. $f(x) = \lim_{h \rightarrow 0} \frac{2^{x+h} - 2^x}{h}$

e. $f(x) = \int_1^{x^2} \sec(t) dt$

3. Compute the following integrals:

a. $\int 1 + x^{-\frac{2}{3}} - \frac{1}{x} + e^{\pi x} + \cos(3x) + \pi^2$

b. $\int x\sqrt{x^2 + 1} dx$

c. $\int x\sqrt{x + 1} dx$

d. $\int_0^1 \frac{e^x}{1 + e^x} dx$

e. $\int_{\frac{\pi}{4}}^{\frac{\pi}{2}} \frac{x \cos(x) - \sin x}{x^2} dx$

4. Sketch the curve $f(x) = 5x^{\frac{2}{3}} - 2x^{\frac{5}{3}}$ by completing the following:

a. Find all/any intercepts(s)

b. Find the intervals of increasing, decreasing, and all/any local extreme points

c. Determine the concavity of f and find all/any points of inflection

d. Sketch the graph of $y = f(x)$

5. Find the equation of the line that is tangent to the curve $x^2 + 2xy + 4y^2 = 12$ at the point $(2, 1)$
6. A ladder $10ft$ long rests against a vertical wall. If the bottom of the ladder slides away from the wall at a rate of $1\frac{ft}{sec}$, how fast is the top of the ladder sliding down the wall when the bottom of the ladder is $6ft$ from the wall?
7. If 1200 cm^2 of material is available to make a box with a square base and open top, find the largest possible volume of the box.

$$\begin{aligned}
 1a) \lim_{x \rightarrow -\infty} \frac{6x^5 - 4x^3 + 3x^2 - x + 1}{(1 - x^5)} \cdot \frac{\frac{1}{x^5}}{\frac{1}{x^5}} \\
 = \lim_{x \rightarrow -\infty} \frac{\frac{6x^5}{x^5} - \frac{4x^3}{x^5} + \frac{3x^2}{x^5} - \frac{x}{x^5} + \frac{1}{x^5}}{\frac{1}{x^5} - \frac{x^5}{x^5}} \\
 = \lim_{x \rightarrow -\infty} \frac{6 - \frac{4}{x^2} + \frac{3}{x^3} - \frac{1}{x^4} + \frac{1}{x^5}}{\frac{1}{x^5} - 1} \\
 = \frac{6 - \frac{4}{\infty^2} + \frac{3}{\infty^3} - \frac{1}{\infty^4} + \frac{1}{\infty^5}}{\frac{1}{\infty^5} - 1} \\
 = \frac{6 - 0 + 0 - 0 + 0}{0 - 1} = \frac{6}{-1} = \boxed{-6}
 \end{aligned}$$

$$\begin{aligned}
 1b) \lim_{x \rightarrow 2} \frac{x^2 + x - 6}{6 - 5x + x^2} \\
 = \lim_{x \rightarrow 2} \frac{(x+3)(x-2)}{(x-3)(x-2)} \\
 = \lim_{x \rightarrow 2} \frac{(x+3)}{(x-3)} \\
 = \frac{2+3}{2-3} = \frac{5}{-1} = \boxed{-5}
 \end{aligned}$$

$$\begin{aligned}
 1c) \lim_{x \rightarrow 0} \frac{1 - \cos(4x)}{x^2} \quad \frac{0}{0} \\
 \stackrel{LH}{=} \lim_{x \rightarrow 0} \frac{4 \sin(4x)}{2x} \quad \frac{0}{0} \\
 \stackrel{LH}{=} \lim_{x \rightarrow 0} \frac{16 \cos(4x)}{2} = \frac{16 \cos(4 \cdot 0)}{2} = \frac{16(1)}{2} = \boxed{8}
 \end{aligned}$$

$$\begin{aligned}
 1d) \lim_{x \rightarrow 0} \frac{\sqrt{1+2x} - \sqrt{1-4x}}{x} \quad \frac{0}{0} \\
 \stackrel{LH}{=} \lim_{x \rightarrow 0} \frac{\frac{1}{2}(1+2x)^{-1/2} \cdot 2 - \frac{1}{2}(1-4x)^{-1/2} \cdot (-4)}{1} \\
 = \lim_{x \rightarrow 0} (1+2x)^{-1/2} - (-2)(1-4x)^{-1/2} \\
 = (1+0)^{-1/2} + 2(1-0)^{-1/2} = 1 + 2(1) = 1 + 2 = \boxed{3}
 \end{aligned}$$

$$1e) \lim_{x \rightarrow \infty} x^{\frac{1}{x}}$$

$$\text{let } y = x^{\frac{1}{x}}$$

$$\ln|y| = \frac{1}{x} \ln|x|$$

$$= \lim_{x \rightarrow \infty} \ln|y|$$

$$= \lim_{x \rightarrow \infty} \frac{\ln x}{x} \quad \frac{\infty}{\infty}$$

$$\stackrel{LH}{=} \lim_{x \rightarrow \infty} \frac{1}{x}$$

$$= \lim_{x \rightarrow \infty} \frac{1}{x} = 0$$

$$\text{so } \lim_{x \rightarrow \infty} y = e^0 = \boxed{1}$$

$$2a) f(x) = 1 + x^{-2/3} - \frac{1}{x} + e^{\pi x} + \cos(3x) + \pi^2$$

$$f'(x) = 0 - \frac{2}{3} x^{-5/3} + x^{-2} + \pi e^{\pi x} - 3 \sin(3x) + 0$$

$$\boxed{f'(x) = \frac{-2}{3 x^{5/3}} + \frac{1}{x^2} + \pi e^{\pi x} - 3 \sin(3x)}$$

$$2b) g(x) = \frac{\ln(2x+3)}{\sin(5x)}$$

$$g'(x) = \frac{\frac{1}{2x+3} \cdot 2 \cdot \sin(5x) - \ln(2x+3) \cdot 5 \cos(5x)}{[\sin(5x)]^2}$$

$$= \frac{\frac{2 \sin(5x)}{2x+3} - 5 \ln(2x+3) \cos(5x)}{\sin^2(5x)}$$

$$= \frac{\frac{2 \sin(5x)}{2x+3}}{\sin^2(5x)} - \frac{5 \ln(2x+3) \cos(5x)}{\sin^2(5x)}$$

$$= \frac{2 \sin(5x)}{(2x+3) \sin^2(5x)} - \frac{5 \ln(2x+3) \cos(5x)}{\sin^2(5x)}$$

$$\boxed{= \frac{2}{(2x+3) \sin(5x)} - \frac{5 \ln(2x+3) \cos(5x)}{\sin^2(5x)}}$$

$$2c) h(t) = \tan^{-1}(2t) \cdot \sqrt{2t-1}$$

$$h'(t) = \frac{1}{(2t)^2+1} \cdot 2 \cdot \sqrt{2t-1} + \frac{1}{2} (2t-1)^{-1/2} \cdot 2 \cdot \tan^{-1}(2t)$$

$$= \boxed{\frac{2\sqrt{2t-1}}{4t^2+1} + \frac{\tan^{-1}(2t)}{\sqrt{2t-1}}}$$

$$2d) f(x) = \lim_{h \rightarrow 0} \left(\frac{2^{x+h} - 2^x}{h} \right)$$

$$= \lim_{h \rightarrow 0} \frac{2^x(2^h - 1)}{h}$$

$$= 2^x \lim_{h \rightarrow 0} \frac{2^h - 1}{h} \quad \frac{0}{0}$$

$$\stackrel{L'H}{=} 2^x \lim_{h \rightarrow 0} \frac{2^h \ln(2)}{1} = 2^x (2^{\ln 2} \ln(2))$$

$$f(x) = 2^x \ln|2|$$

$$f'(x) = 2^x \cdot \ln|2| \cdot \ln|2|$$

$$= \boxed{2^x (\ln|2|)^2}$$

$$2e) f(x) = \int_1^{x^2} \sec(t) dt$$

$$f'(x) = \sec(x^2) \cdot \frac{d}{dx} [x^2] \quad \text{by FTC 1}$$

$$\boxed{f'(x) = \sec(x^2) \cdot 2x}$$

$$3a) \int 1 + x^{-2/3} - \frac{1}{x} + e^{\pi x} + \cos(3x) + \pi^2$$

$$= \boxed{x + 3x^{1/3} - \ln|x| + \frac{1}{\pi} e^{\pi x} + \frac{1}{3} \sin(3x) + \pi^2 x + C}$$

$$3b) \int x\sqrt{x^2+1} dx$$

$$= \int x(x^2+1)^{1/2} dx$$

$$= \frac{1}{2} \int 2x(x^2+1)^{1/2} dx$$

$$\text{let } u = x^2 + 1$$

$$= \frac{1}{2} \int u^{1/2} du$$

$$du = 2x dx$$

$$= \frac{1}{2} \left(\frac{2}{3} u^{3/2} \right)$$

$$= \frac{1}{3} (x^2+1)^{3/2} + C$$

$$= \frac{\sqrt{(x^2+1)^3}}{3} + C$$

$$3c) \int x\sqrt{x+1} dx$$

$$= \int x(x+1)^{1/2} dx$$

$$\text{let } u = x+1$$

$$u-1 = x$$

$$= \int (u-1)(u-1+1)^{1/2} du$$

$$du = dx$$

$$= \int (u-1)(u^{1/2}) du$$

$$= \int u^{3/2} - u^{1/2} du$$

$$= \frac{2}{5} u^{5/2} - \frac{2}{3} u^{3/2} + C$$

$$= \frac{2}{5} (x+1)^{5/2} - \frac{2}{3} (x+1)^{3/2} + C$$

$$= \frac{2\sqrt{(x+1)^5}}{5} - \frac{2\sqrt{(x+1)^3}}{3} + C$$

$$3d) \int_0^1 \frac{e^x}{1+e^x} dx$$

$$\text{let } u = 1+e^x$$

$$du = e^x dx$$

$$= \int_{x=0}^{x=1} \frac{1}{u} du$$

$$= \ln|u| \Big|_{x=0}^{x=1}$$

$$= \ln|1+e^x| \Big|_0^1$$

$$= \ln|1+e| - \ln|1+e^0|$$

$$= \ln|1+e| - \ln|1+1|$$

$$= \ln|1+e| - \ln|2| = \ln\left(\frac{1+e}{2}\right)$$

$$= \ln\left(\frac{1+e}{2}\right)$$

$$3e) \int_{\pi/4}^{\pi/2} \frac{x \cos(x) - \sin(x)}{x^2} dx$$

$\frac{x \cos(x) - \sin(x)}{x^2}$ is in the form of $\frac{f'(x)g(x) - g'(x)f(x)}{g^2(x)}$

When $g(x) = x$, $f(x) = \sin(x)$

$$\frac{d}{dx} \left(\frac{f(x)}{g(x)} \right) = \frac{x \cos(x) - \sin(x)}{x^2}$$

therefore, $\int_{\pi/4}^{\pi/2} \frac{x \cos(x) - \sin(x)}{x^2} = \frac{f(x)}{g(x)} = \frac{\sin(x)}{x} \Big|_{\pi/4}^{\pi/2}$

$$\begin{aligned} &= \frac{\sin(\pi/2)}{\pi/2} - \frac{\sin(\pi/4)}{\pi/4} \\ &= \frac{2}{\pi} \cdot 1 - \frac{\sqrt{2}}{2} \cdot \frac{4}{\pi} \\ &= \frac{2}{\pi} - \frac{2\sqrt{2}}{\pi} \\ &= \boxed{\frac{2-2\sqrt{2}}{\pi}} \end{aligned}$$

$$4a) f(x) = 5x^{2/3} - 2x^{5/3}$$

$$f(x) = x^{2/3}(5 - 2x)$$

x-intercepts $0 = x^{2/3}(5 - 2x)$

$$0 = x^{2/3} \quad x = 0$$

$$0 = 5 - 2x$$

$$2x = 5$$

$$x = \frac{5}{2}$$

x-intercepts @: $x = 0$
 $x = \frac{5}{2}$

y-intercepts $y = x^{2/3}(5 - 2x)$

$$y = 0^{2/3}(5 - 2(0))$$

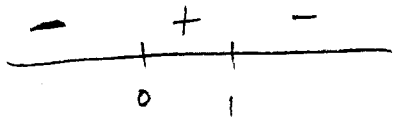
$$y = 0$$

y-intercept @: $y = 0$

$$4b) \quad f'(x) = \frac{10}{3}x^{-\frac{1}{3}} - \frac{10}{3}x^{\frac{2}{3}}$$

$$0 = \frac{10}{3}x^{-\frac{1}{3}}(1-x)$$

$$x = 0, 1$$



DEC $(-\infty, 0) \cup (1, \infty)$

INC $(0, 1)$

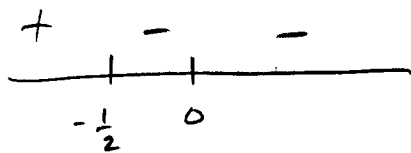
LOCAL EXT: $(0, 0), (1, 3)$

$$4c) \quad f''(x) = -\frac{10}{9}x^{-\frac{4}{3}} - \frac{20}{9}x^{-\frac{1}{3}}$$

$$0 = -\frac{10}{9}x^{-\frac{4}{3}} - \frac{20}{9}x^{-\frac{1}{3}}$$

$$-\frac{10}{9}x^{-\frac{4}{3}}(1+2x)$$

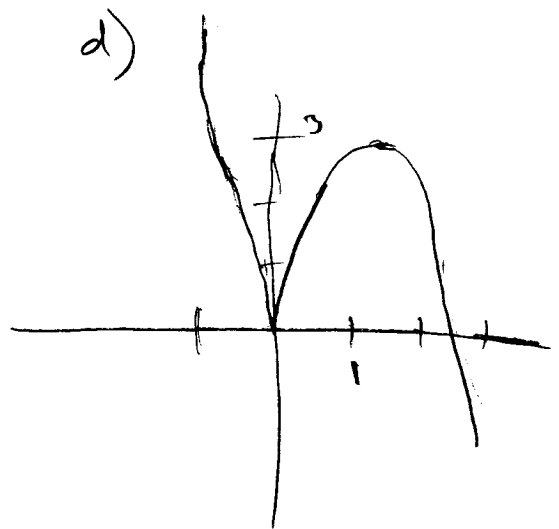
$$x = 0, -\frac{1}{2}$$



CONCAVE UP: $(-\infty, -\frac{1}{2})$

CONCAVE DOWN $(-\frac{1}{2}, \infty)$

POI @ $(0, 0)$



$$5) \frac{d}{dx} (x^2 + 2xy + 4y^2) = \frac{d}{dx} (12)$$

$$2x + 2y + 2xy' + 8yy' = 0$$

$$\frac{2}{2} (x + y + xy' + 4yy') = \frac{0}{2}$$

$$xy' + 4yy' = -x - y$$

$$\frac{y'(x + 4y)}{(x + 4y)} = \frac{-x - y}{(x + 4y)}$$

$$y' = \frac{-x - y}{x + 4y}$$

$$m_{\text{tan}} = \frac{-2 - 1}{2 + 4(1)} = -\frac{1}{2}$$

$$y - 1 = -\frac{1}{2}(x - 2)$$

$$y = -\frac{1}{2}x + 2$$

$$6) 1 \frac{\text{ft}}{\text{sec}} = \frac{dx}{dt}, \text{ Find } \frac{dy}{dt}$$

$$x^2 + y^2 = 10^2$$

$$2x \left(\frac{dx}{dt} \right) + 2y \left(\frac{dy}{dt} \right) = 0$$

$$y \left(\frac{dy}{dt} \right) = -x \left(\frac{dx}{dt} \right)$$

$$\frac{dy}{dt} = \frac{-x}{y} \left(\frac{dx}{dt} \right) \rightarrow \frac{dy}{dt} = -\frac{6}{8} (1) \rightarrow \boxed{\frac{dy}{dt} = -\frac{3}{4} \text{ ft/sec.}}$$



$$6^2 + y^2 = 10^2$$

$$y^2 = 100 - 36$$

$$y = 8$$

$$7) 1200 = L^2 + 4LH$$

$$\frac{1200 - L^2}{4L} = \frac{4LH}{4L}$$

$$H = \frac{300}{L} - \frac{1}{4}L$$

$$\boxed{L = 20, H = 10}$$

$$V = L^2 \left(\frac{300}{L} - \frac{L}{4} \right)$$

$$V = 300L - \frac{L^3}{4}$$

$$V' = 300 - \frac{3L^2}{4}$$

$$V' = 0 = 300 - \frac{3L^2}{4}$$

$$\frac{100}{300} \cdot \frac{4}{3} = L^2$$

$$L^2 = 400$$

$$L = 20$$

$$H = \frac{300}{20} - \frac{1}{4} \cdot 20 = 15 - 5 = 10$$

